

CADET COLLEGE PETARO

CLASS O-I

Syllabus Outline for MATHEMATICS Paper

CHAPTER # 1

ALGEBRA

- 1 Simplifying and evaluating Algebraic Expressions
 - 2 Solving Word Problems
- Review 1

CHAPTER # 2

ANGLES IN GEOMETRIC FIGURES

- 1 Finding Unknown Angles
- Review 2

CHAPTER # 3

FRACTIONS

- 1 Dividing a Fraction by a Whole Number
 - 2 Dividing a Whole Number by a Fraction
 - 3 Dividing a Fraction by a Fraction
 - 4 Solving Word Problems
- Review 3

CHAPTER # 4

RATIO

- 1 Ratio and Fraction
 - 2 Finding Part and Whole
 - 3 Solving Word Problems
- Review 4

CHAPTER # 5

PERCENTAGE

- 1 Finding the Whole Given a Part and the Percentage
 - 2 Percentage Increase and Decrease
 - 3 Solving Word Problems
- Review 5

CHAPTER # 6

CIRCLES

- 1 Parts of a Circle
 - 2 Area of a Circle
 - 3 Area and Perimeter of Composite Figures
- Review 6

CHAPTER # 7

SPEED

- 1 Speed, Distance and Time
 - 2 Average Speed
 - 3 Solving Word Problems
- Review 7

CHAPTER # 8

VOLUME OF CUBES AND CUBOIDS

- 1 Volume of Cubes and Cuboids
 - 2 Solving Word Problems
- Review 8

CHAPTER # 9

PIE CHARTS

- 1 Reading Pie Charts
 - 2 Solving Word Problems
- Review 9

CHAPTER # 10

SOLID FIGURES

- 1 Solid Figures
 - 2 Nets of Solid Figures
- Review 10

CADET COLLEGE PETARO

CLASS O-I MODEL TEST PAPER MATHEMATICS

Time: 1 Hour

Max. Marks: 100

SECTION A

NOTE: Attempt all 15 MCQ's. Fill the correct option in the space given at the end of each question.

1. Which of these is an Integer?

- A. $\frac{7}{10}$
- B. 6.5
- C. -12
- D. $-2\frac{3}{8}$

Answer: ()

2. Which number has the Prime Factors, $2 \times 3^2 \times 5$?

- A. 13
- B. 30
- C. 60
- D. 90

Answer: ()

3. What is the value of $3 + 4 \times 5 - 1$?

- A. 11
- B. 22
- C. 34
- D. 59

Answer: ()

4. Which statement is true?

A. $-14 > -28$

B. $-25 > 1$

C. $-12 > -10$

D. $-15 > 0$

Answer: ()

5. What is another way to write 1,064?

A. $(1 \times 10^2) + (6 \times 10^1) + (4 \times 10^0)$

B. $(1 \times 10^3) + (6 \times 10^1) + (4 \times 10^0)$

C. $(1 \times 10^3) + (6 \times 10^2) + (4 \times 10^1)$

D. $(1 \times 10^4) + (6 \times 10^2) + (4 \times 10^1)$

Answer: ()

6. Which number represent all this graph?



sentence can be used to the values of n shown on

A. $n > 7$

B. $n \geq 7$

C. $n < 7$

D. $n \leq 7$

Answer: ()

7. Use the picture to answer the question.

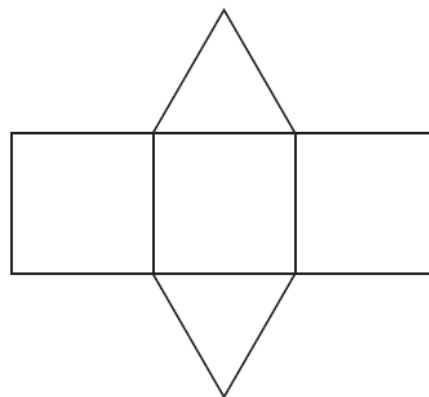
Which solid figure does the net represent?

A. Cone

B. Cylinder

C. Triangular Prism

D. Rectangular Prism



Answer: ()

8. What value of x correctly completes the equation, $12 + x = 16\frac{1}{4}$?

A. $3\frac{3}{4}$

B. $4\frac{1}{4}$

C. $27\frac{3}{4}$

D. $28\frac{1}{4}$

Answer: ()

9. Use the grid to answer the question.

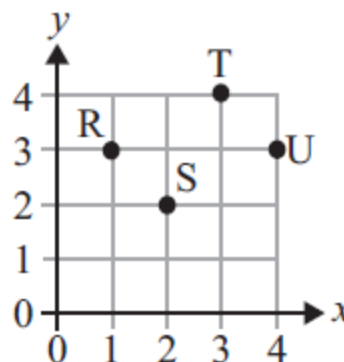
Which point is described by the ordered pair (3, 4)?

A. point R

B. point S

C. point T

D. point U



Answer: ()

10. A family of 2 adults and 3 children went to a movie. The tickets cost Rs.80 for adults and Rs.50 for children. Which expression represent the total cost of the tickets?

A. $2 + 3 + 80 + 50$

B. $(50 \times 80) + (3 \times 2)$

C. $(2 \times 80) + (3 \times 50)$

D. $(3 \times 80) + (2 \times 50)$

Answer: ()

11. Use the parallelogram to answer the question.

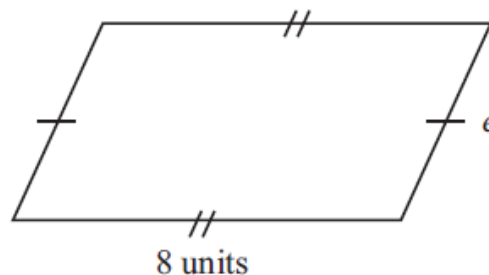
The perimeter of the parallelogram is 28 units.
What is the length of side e ?

A. 6 units

B. 8 units

C. 12 units

D. 20 units



Answer: ()

12. Altogether, Saram and Noman have Rs.27.00. Saram buys a shirt for Rs.12.35 and Noman buys a pair of sandals for Rs.10.11. How much money remains?

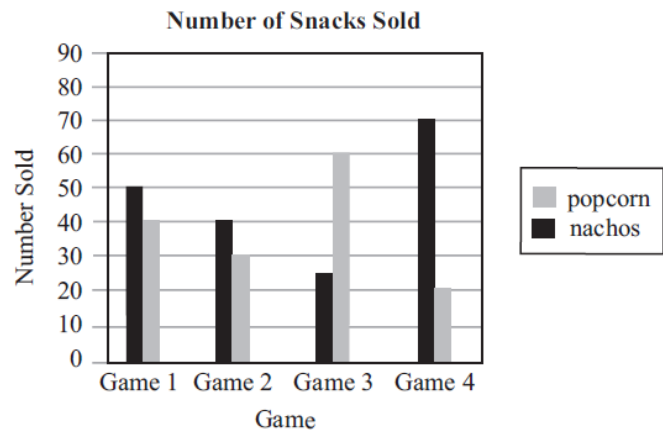
A. Rs.4.46 B. Rs.4.54 C. Rs.5.36 D. Rs.5.76

Answer: ()

13. Use the bar graph to answer the question.

The graph shows the number of snacks sold at the 4 games. At which game were the fewest snacks sold?

- A. Game 1
B. Game 2
C. Game 3
D. Game 4



Answer: ()

14. Which symbol can be placed in the box to make the following an expression?

$$12 - 3x \square 5$$

- A. \leq
B. $>$
C. $=$
D. $+$

Answer: ()

15. Which phrase is represented by $3(8 - n) + 2$?

- A. The sum of two and three times the quotient of eight and a number, n
B. The sum of two and three times the difference between a number, n, and eight
C. Two more than the difference between three times a number, n, and eight
D. Two more than three times the difference between eight and a number, n

Answer: ()

SECTION B

NOTE: Attempt all the questions. Show the working clearly and write answer in the given space after each question.

Q-1

i) Find the Lowest Common Multiple of the following: [4]

3, 8, 16

Answer: _____

ii) Simplify the following expression: [4]

$$6(7c - 2) - 4(c - c^2 - 8)$$

Answer: _____

iii) Solve the following equation [4]

$$\frac{2x - 2}{3} = 4$$

Answer: _____

- iv) Find the new temperature for each of the following.
You may need to draw a Number Line.

[4]

- (a) The temperature was -13.58°C and rises by 19.1°C .
(b) The temperature was -1.66°C and falls by 7.7°C .

Answer: (a) _____, (b) _____

- v) Find the Highest Common Factor of the following numbers.

[4]

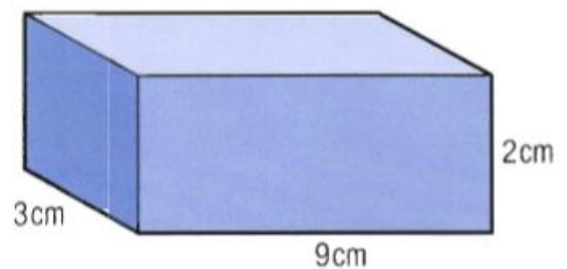
21, 42, 56.

Answer: _____

Q-2

- i) Calculate the Volume of the Cuboid shown.

[2]



Answer: _____

ii) Find the Mean, Median, Mode and Range of this set of data.

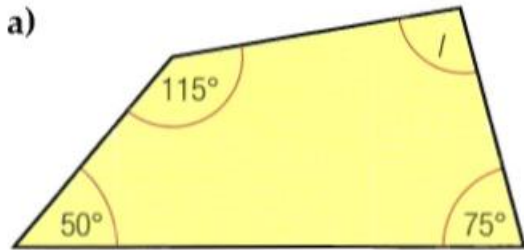
[5]

1, 1, 1, 1, 2, 2, 3, 4, 4, 4, 4, 4, 5, 5, 6.

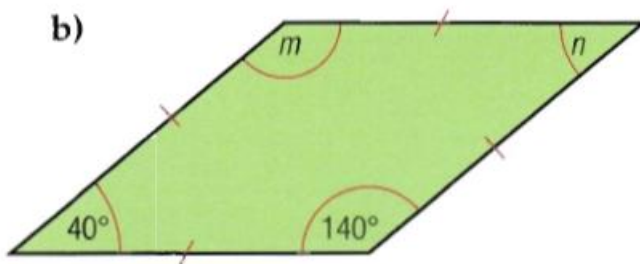
Answer: Mean= _____, Median= _____, Mode= _____, Range= _____

iii) Work out the size of each of the unknown angles in these diagrams.

[3]



Answer: (a) = _____



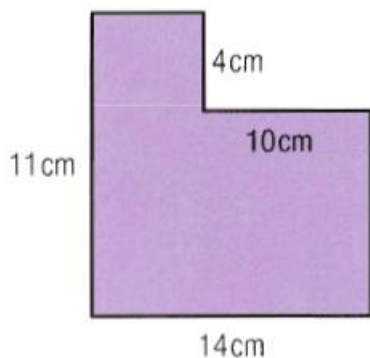
Answer: (b) m = _____, n = _____

Q-3

- i) Jamil spends $\frac{1}{3}$ of his pocket money on sweets. He saves $\frac{1}{9}$ of his pocket money. [2]
What fraction of his pocket money is left?

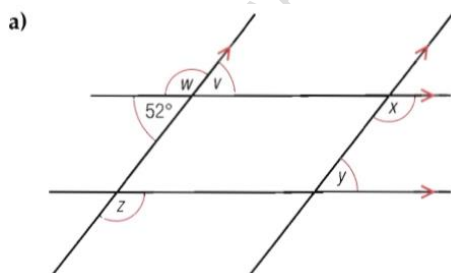
Answer: _____

- ii) Calculate the Area and Perimeter of this shape. [6]



Answer: Area = _____ cm^2 , Perimeter = _____ cm

- iii) Work out the size of each of the unknown angles in the diagrams. [5]



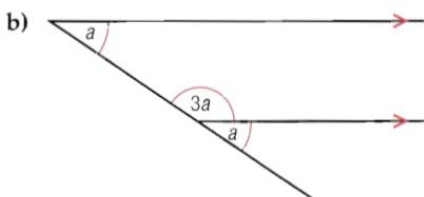
Answer: (a) $v =$ _____

$w =$ _____

$x =$ _____

$y =$ _____

$z =$ _____



[3]

Answer: (b) $a =$ _____

Q-4

i) Evaluate the following:

[4]

(a) $\frac{5}{18} - \frac{8}{9} + \frac{5}{6}$

(b) $\frac{2}{13} + \frac{5}{13} + \frac{3}{13}$

Answer: (a) _____ , (b) _____

ii) Complete this table.

[6]

Fraction	Decimal	Percentage
$\frac{1}{2}$		%
	0.25	%
		75 %

Answer:

iii) Complete the following statements, writing one the signs =, > or < to make each statement true.

[4]

(a) 8×8 _____ $4 \times 4 \times 4$

(b) 100 cm _____ 1000 mm

(c) 73 cm _____ 0.7 m

(d) 4.75 tonnes _____ 47500 kg

:Answer

Q-5

i) Convert each of these measures to the units shown in brackets. [2]

(a) 7.142 kg (g)

(b) 12568 m (km)

Answer: (a) _____ g, (b) _____ km

ii) Without using the calculator, evaluate the following square root. [2]

$$\sqrt{625}$$

Answer: _____

iii) In a survey of 500 cars, 245 were White, 25 were Blue and 13 were Red. [2]
The rest were Silver. Express number of Silver cars as a Percentage of the Total.

Answer: _____ %

- iv) A bus journey from a Town to a City takes 2 hour 38 minutes.
Complete the timetable beside.

[2]

Depart	Arrive
05 00	07 38
07 20	(a)
08 40	11 18
(b)	13 36

Answer: (a) _____, (b) _____

- v) For each sequence below write down the next two terms.

[2]

(a) 31 24 17 10

(b) 24 12 6 3

Answer: (a) _____, (b) _____

THE END